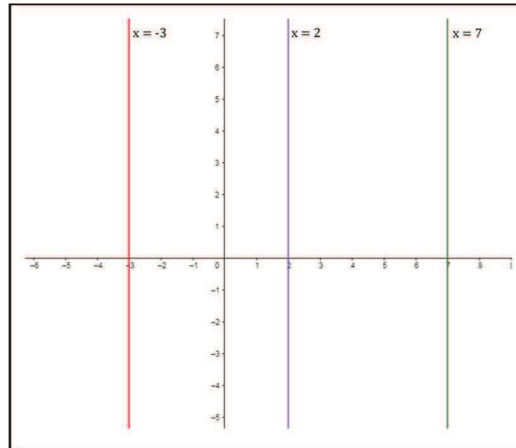
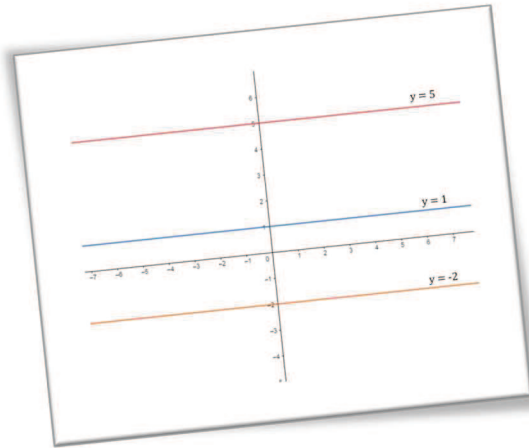


REGUIT LYNE: Spesiale Lyne: $x = c, y = c$

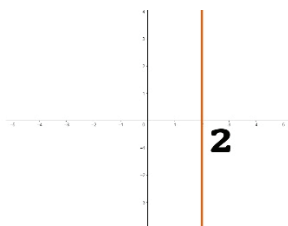
 9027 Kyk les en doen voorbeelde

Les Notas en Voorbeelde:

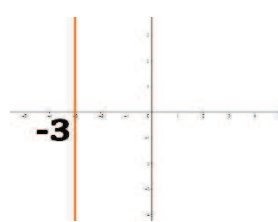


Skryf die vergelykings van die volgende grafieke neer:

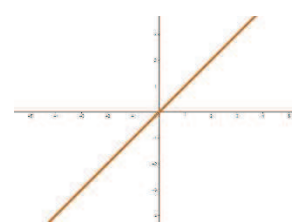
1)



2)

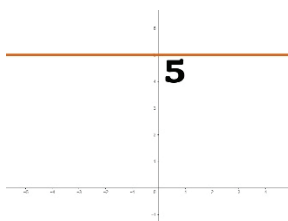


3)




 Merk werk en doen korreksies. [1-3]

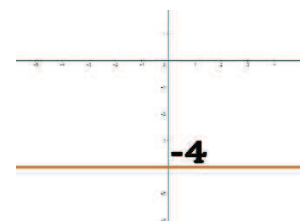
4)



5)

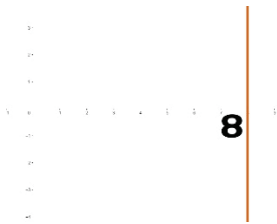


6)

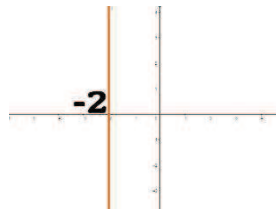


 Merk werk en doen korreksies. [4-6]

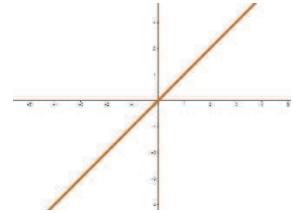
7)



8)

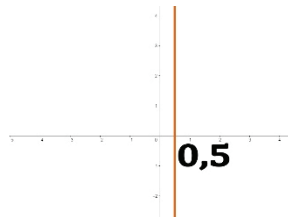


9)



 Merk werk en doen korreksies. [7-9]

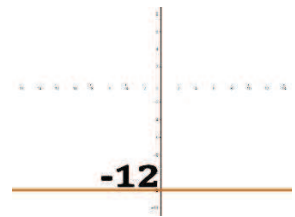
10)



11)



12)



 Merk werk en doen korreksies. [10-12]

Skets die volgende grafieke:

13) $y = 5$

14) $x = -4$

15) $y = x$

 Merk werk en doen korreksies. [13-15]

16) $x = 1$

17) $x = -7$

18) $y = -3$

 Merk werk en doen korreksies. [16-18]

19) $y = -x$

20) $y = 5,5$

21) $x = 8$

 Merk werk en doen korreksies. [19-21]

22) $x = -1,5$

23) $x = \frac{3}{4}$

24) $y = \frac{7}{2}$

 Merk werk en doen korreksies. [22-24]